





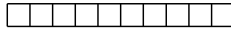










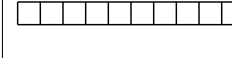







Prénom : .....

## DIZAINES ET UNITÉS

Écris le nombre de dizaines et le nombre d'unités.

|   |  |   |   |  |   |   |   |   |   |
|---|--|---|---|--|---|---|---|---|---|
| <br><br><br> | <br><br><br><br> | <br><br><br><br><br> | <br><br><br><br><br> | <br><br><br><br><br> |   |   |   |   |   |
| d   | u  | d   | u   | d  | u | d | u | d | u |
|   |  |   |   |  |   |   |   |   |   |

Regroupe les étoiles par dizaines .

|     |     |   |    |    |    |   |    |    |    |   |
|-----|-----|---|----|----|----|---|----|----|----|---|
| ★   | ★   | ★ | ★  | ★★ | ★  | ★ | ★★ | ★★ | ★★ |   |
| ★★★ | ★★★ | ★ | ★★ | ★  | ★★ | ★ | ★  | ★★ | ★★ | ★ |

..... dizaines et ..... unités.

..... étoiles en tout.

|   |   |   |   |   |   |   |   |   |   |   |   |
|---|---|---|---|---|---|---|---|---|---|---|---|
| □ | □ | □ | □ | □ | □ | □ | □ | □ | □ | □ | □ |
| □ | □ | □ | □ | □ | □ | □ | □ | □ | □ | □ | □ |

Il y a ..... dizaines et ..... unités.

Cela fait ..... cadres.